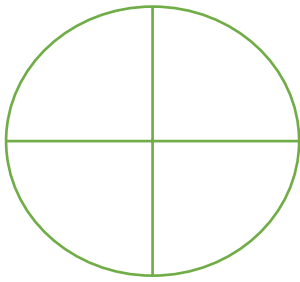



## Fractions of a shape

1.




Shade  $\frac{1}{4}$  of this shape

2.



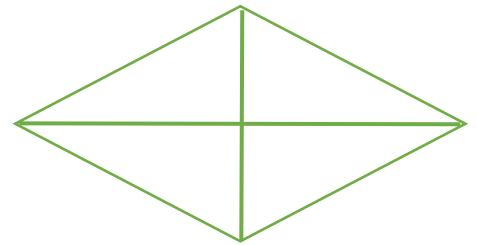
Shade  $\frac{1}{2}$  of this shape

3.



Shade  $\frac{1}{2}$  of this shape

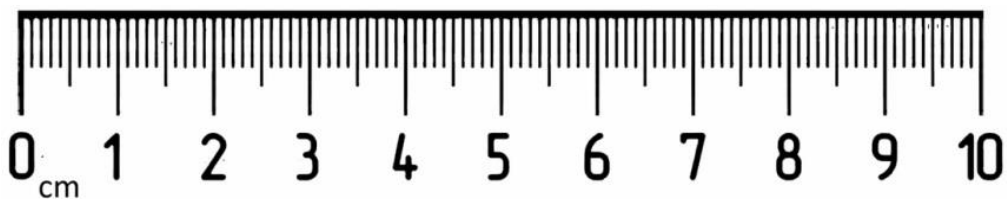
4.



Shade  $\frac{1}{4}$  of this shape

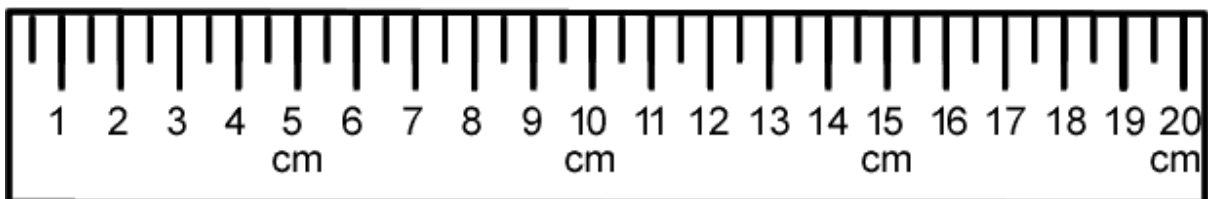
## Fractions of a length

5.




Find  $\frac{1}{2}$  of 10cm

6.



Find  $\frac{1}{4}$  of 20cm

7.



a) Find a  $\frac{1}{2}$  of 12cm

b) Find  $\frac{1}{4}$  of 12 cm

### **Fraction of an amount**

8. What is  $\frac{1}{2}$  of 16?

9. What is  $\frac{1}{4}$  of 8?

10. What is  $\frac{1}{2}$  of 14?

11. What is  $\frac{1}{4}$  of 24?

12. What is  $\frac{1}{2}$  of 6?

**Please take a picture of your work and send it to your teacher. Don't forget to also answer the self-assessment questions on the timetable and send your answers to your teacher.**

**Well done 😊**