

**L.O. To be able to find fractions of a shape, length and quantity (deepening).**




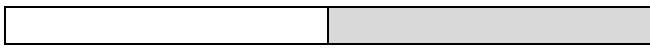

SC1 – I can find  $\frac{1}{2}$  and  $\frac{2}{4}$


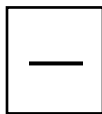

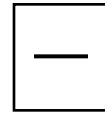
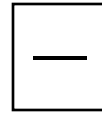
SC2 – I can find  $\frac{1}{4}$

SC3 – I can find  $\frac{3}{4}$

SC4 – I can find  $\frac{1}{3}$

What fraction of the shapes below are shaded?





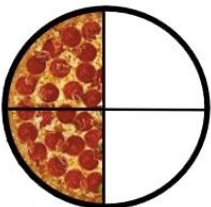
What fraction has been eaten? \_\_\_\_\_

What fraction is left? \_\_\_\_\_




What fraction has been eaten? \_\_\_\_\_

What fraction is left? \_\_\_\_\_



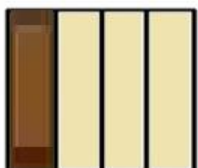
What fraction has been eaten? \_\_\_\_\_

What fraction is left? \_\_\_\_\_



What fraction has been eaten? \_\_\_\_\_

What fraction is left? \_\_\_\_\_



What fraction has been eaten? \_\_\_\_\_

What fraction is left? \_\_\_\_\_

