


Evaluating statements about time

1.

Jack says, 'There isn't any point in having a minute hand on a clock because I can still tell the time without it!'


Do you agree with him?

Explain your answer.



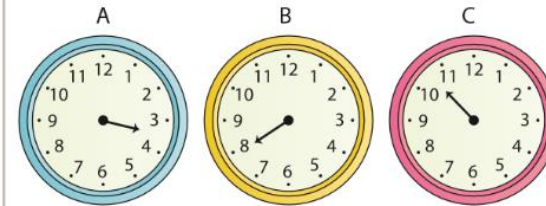
2.

Which of these clock faces shows a time between 5 o'clock and 7 o'clock?



3.

These clocks have only one hand, but can you suggest a time that each could be showing?



Explain your reasoning.

4.

Match the two clocks that show the same time.

