


Extend and Describe Shape Patterns 1

Can you extend and describe these patterns?


What shape will come next? _____

Draw the next 3 shapes.



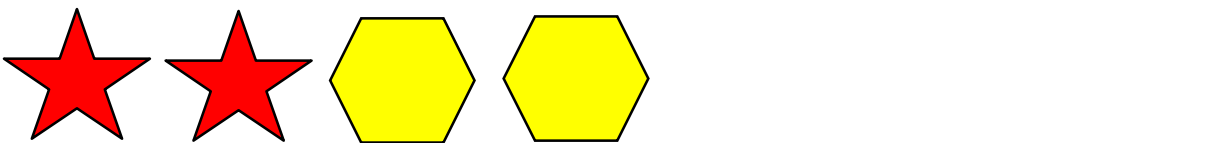
What shape will come next? _____

Draw the next 3 shapes.



What shape will come next? _____

Draw the next 3 shapes.



What shape will come next? _____

Draw the next 3 shapes.

