




REASONING AND PROBLEM SOLVING

<p>1) Mo has the following coins.</p>  <p>He thinks he has 51p. Explain his mistake.</p>	<p>2) Here are some coins and a note.</p>  <p>Amir says "There is a 10p". Dexter says "There is a £10". Are either of them correct? Explain why.</p>
<p>3) Rosie says "I have 43p in silver coins" Is she correct? Explain why?</p>	<p>4) How many ways can you make 10p using only copper coins?</p>
<p>5) Circle the odd one out. 23p = 20p, 2p 1p 25p = 20p, 5p 28p = 20p, 8p Explain your answer.</p>	<p>6) Annie and Ron both claim to have 90p Annie has 3 coins and Ron has 4 coins. Could they be correct? Which coins could they have?</p>
<p>7) Annie has three coins in her hand. Jack says "I have more than you because I have a 50p coin." Is he correct? Explain why?</p>	<p>8) James says "Four 5p coins are worth more than two 10p coins".</p>  <p>Do you agree? Explain why.</p>