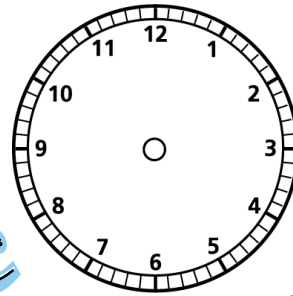
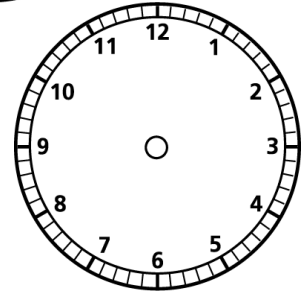


Draw the hands on the clock to show the time the different sports events start:

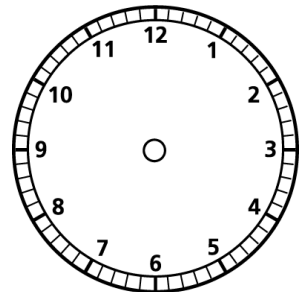
The swimming starts at 13 minutes past 9.



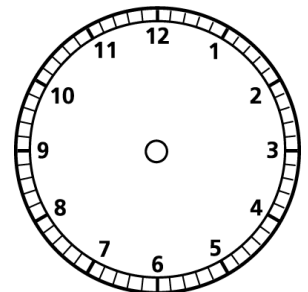
The football starts at 3 minutes past 11.



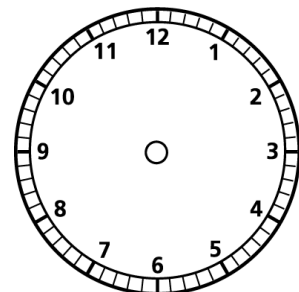
The basketball starts at 28 minutes to 4.



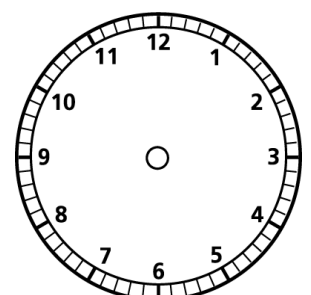
The running starts at 24 minutes to 10.



The horse riding starts at 9 minutes to 9.



The cycling starts at 9 minutes past 2.
It lasts for 30min.



What time does it finish? Draw the time on the clock.