


Tell the Time: Writing the Time


Write the time shown on each clock.




_____ o'clock



_____ o'clock



_____ o'clock



_____ o'clock




_____ o'clock



_____ o'clock



_____ o'clock



_____ o'clock



_____ o'clock



_____ o'clock



_____ o'clock




_____ o'clock

Tell the Time: Drawing the Time

Draw the time on each clock.




5 o'clock



11 o'clock



4 o'clock




9 o'clock



1 o'clock



10 o'clock




2 o'clock



6 o'clock




3 o'clock



8 o'clock



12 o'clock



7 o'clock