


Empty number line example

$35 - 27$

1.) Draw a line



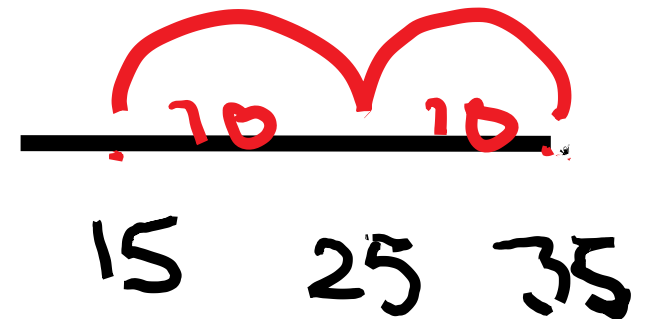
2.) Put the minuend on the right hand side



3.) Can you count back in tens? How many tens are there in the minuend?

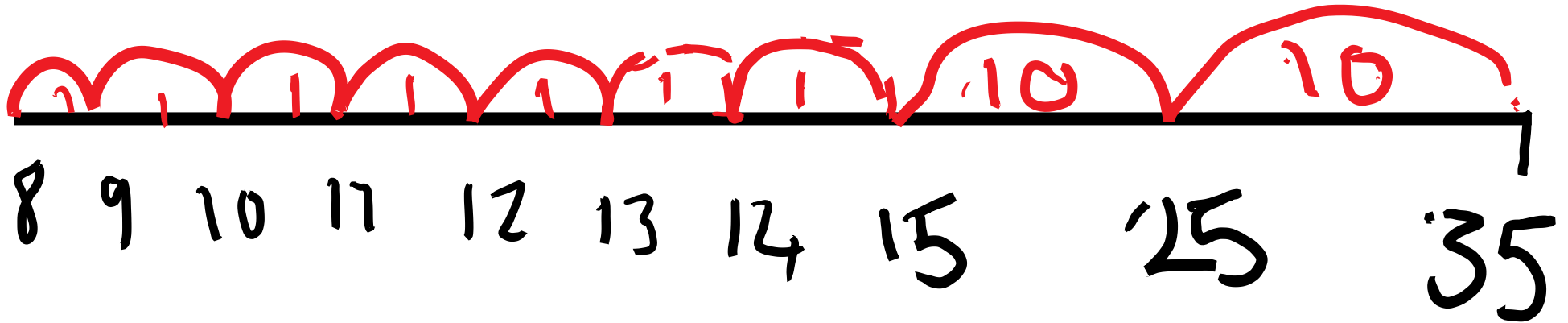


4.) Count back in tens. There are 2 tens, jump back twice.



5.) Write inside the jumps what you have counted back in

6.) Now count back in ones. How many ones are there in the minuend? 7



7.) Write out the number sentence: $35 - 27 = 8$