

Thursday 3rd March

LO: I can solve problems

Know:

I know that adding is combining sets together to find the total.

I know the value of coins.

Show:

I can show the answer of combining two sets together.

I can select two groups of coins to make a given total.

I can select the correct coins to show the value of a total.

STARTER

Complete the quiz on adding coins

THEN

Watch Mrs Ryan's main video



ACTIVITY

Using the Great Pet Sale Resource choose 2 animals and have a go at adding the 2 values together? What would they cost to but them both?

Vocabulary

Coins

Money


Value

Total

Add

Together

Combine



Key Questions



What does each animal cost?

What is the total?

What does add mean?

Which has the highest value?



Chilli Questions






Can you use the animals to make a total of __p? Are these the only animals you can use?



Money Adding Quiz

Can you add the coins to find the correct total?

1.  And  Totals


2.  And  Makes

3.  And  And  Makes

4.  And  Makes

The questions
Square & Triangle Group

1



How much will it cost to buy the parrot and the tortoise?

2

I have 20 pence, what animals can I buy?

3

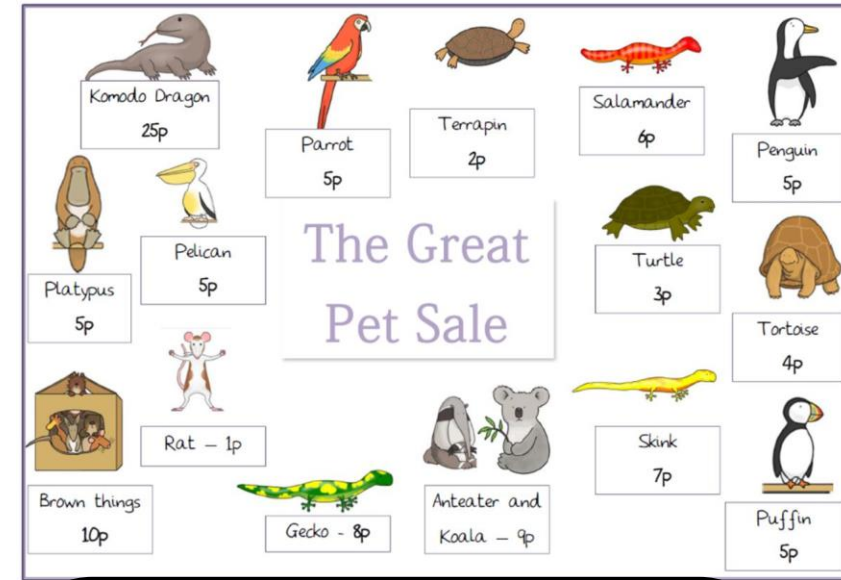
I want to buy the Komodo Dragon which costs 25p. What coins do I need?



4



I want to buy all the animals.
How much money do I need?
What coins could I use?
How many ways can I make the value that I need



The questions Circle Group

1



Parrot
5p


















Tortoise
4p

How much will it cost to buy the parrot and the tortoise?

2

I have 20 pence, what animals can I buy?

The Great Pet Sale

 Komodo Dragon 25p	 Parrot 5p	 Terrapin 2p	 Salamander 6p	 Penguin 5p
 Platypus 5p	 Pelican 5p	 Turtle 3p	 Tortoise 4p	
 Brown things 10p	 Rat - 1p	 Anteater and Koala - 9p	 Skink 7p	 Puffin 5p
	 Gecko - 8p			

3

I want to buy the Anteater and the koala bear, which costs 9 pence. What coins do I need for this value?



Anteater and
Koala - 9p




Can you create your own word problem using the animals from the Great Pet sale?

Here is an example
I have 12 pence and I want to buy 2 animals which animals can I buy?

Way 1




Way 2



Way 3






Komodo Dragon

25p




Parrot

5p



Terrapin

2p



Salamander

6p



Penguin

5p



Platypus

5p



Pelican

5p

The Great Pet Sale



Turtle

3p



Tortoise

4p



Brown things

10p



Rat - 1p



Gecko - 8p



Anteater and

Koala - 9p



Skink

7p



Puffin

5p